

Let's Go Shopping!

(Story Problems)

Mary wants to buy the doll. She has \$10.00

How much change will she get?

Sally wants to buy the doll, too.

She has \$7.75.

How much more money does she need?

Michael wants the robot and the bag of marbles.

How much money will he need?

Pam wants the teddy bear.

She has \$9.00.

How much change will she get?

Jill wants the blocks for her baby brother.

She has \$3.50.

How much more money does she need?

Jack wants to buy the marbles and the blocks and he has \$8.00

How much money will he need?

How much change will he get?

Mrs. Jones wants to buy everything!

How much money will she need?

Ron wants to buy 1 robot for himself and 1 for his best friend.

How much money will he need?

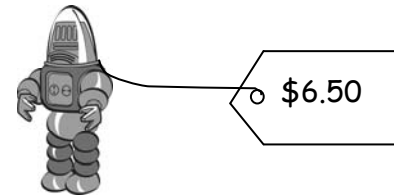
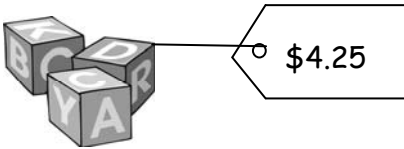
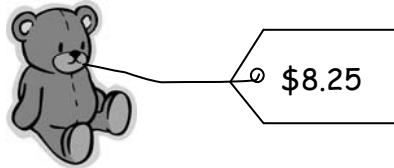
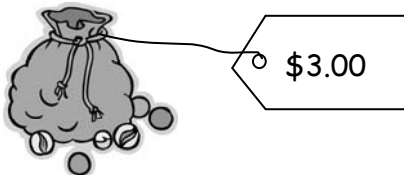
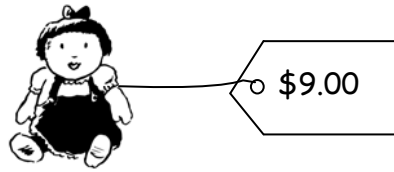

Jon wants to buy 2 sets of blocks.

How much money will he need?

Bill and 4 of his friends want to have a marble contest.

How much will it cost to buy marbles for each of them?

Let's Go Shopping!



1



+



2



+



3



+



4



+



5



+



6



+



\$10.00

\$17.25

\$9.50

\$12.25

\$12.50

\$7.25



