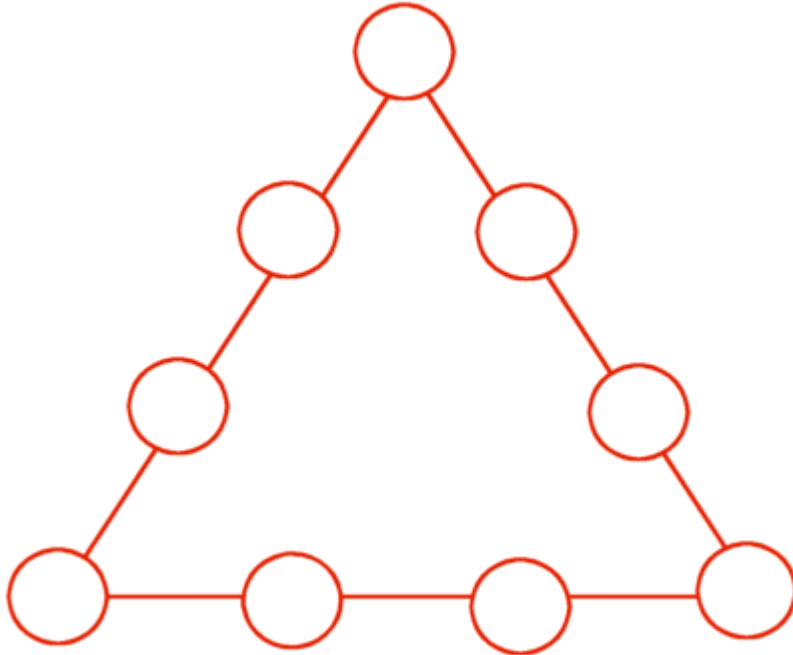


Number Triangles

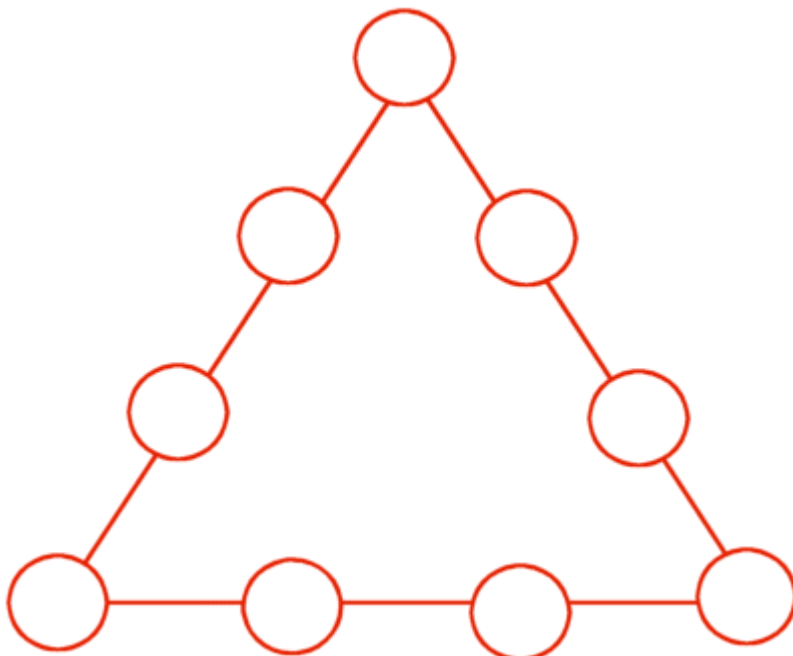
Write numbers in the circles so that each side of the triangle equals 20.



Use each number only once.

- | | |
|---|---|
| 1 | 6 |
| 2 | 7 |
| 3 | 8 |
| 4 | 9 |
| 5 | |

Write numbers in the circles so that each side of the triangle equals 19.



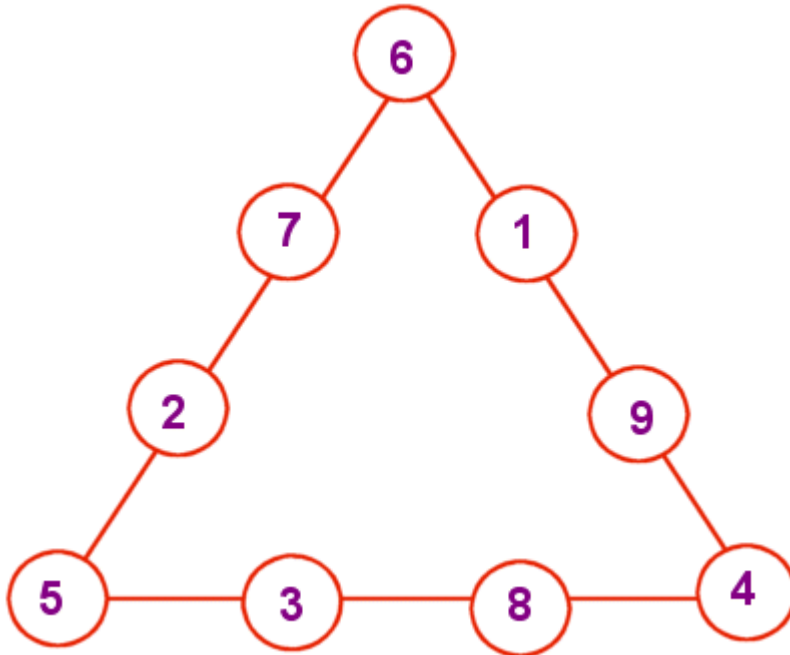
Use each number only once.

- | | |
|---|---|
| 1 | 6 |
| 2 | 7 |
| 3 | 8 |
| 4 | 9 |
| 5 | |

Number Triangle Puzzle answer key, Note: There may be more than one way to solve these puzzles.

Number Triangles

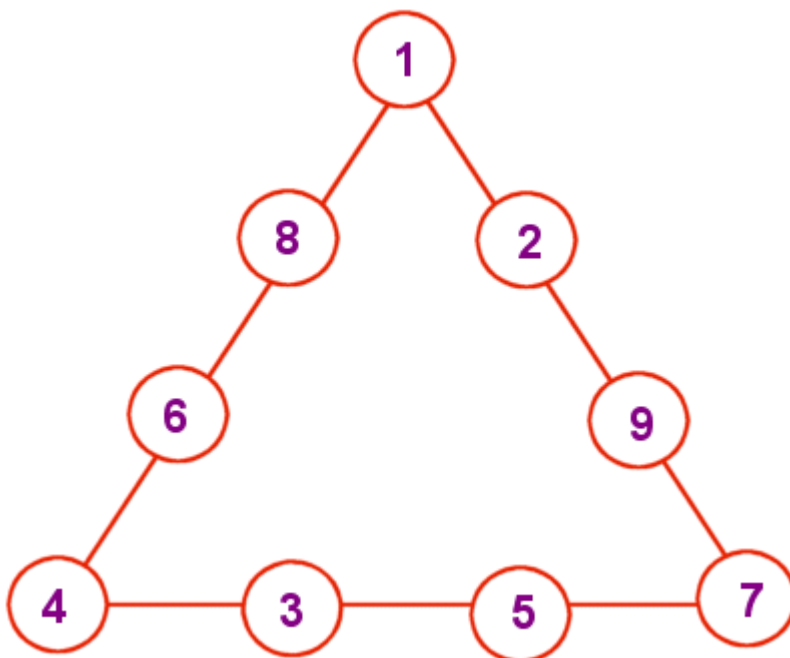
Write numbers in the circles so that each side of the triangle equals 20.



Use each number only once.

1	6
2	7
3	8
4	9
5	

Write numbers in the circles so that each side of the triangle equals 19.



Use each number only once.

1	6
2	7
3	8
4	9
5	